

Name: _____

Date: _____

Seaman Apprentice Exam

- 1.) The Uniform your senior naval science instructor (SNSI) will direct you to wear on any given day is known as the...
 - A. Uniform of the school
 - B. Uniform of the Navy
 - C. Uniform of the Day
 - D. Designated Uniform

- 2.) What articles/ items may be worn in uniform?
 - A. Cell phones
 - B. Earrings
 - C. Watch chains
 - D. no articles may be worn

- 3.) Which of the following statements is true regarding the female hair?
 - A. The hair may not touch the collar
 - B. The hair may not touch the female shirt at all
 - C. The hair may touch, but cannot fall below the horizontal line level with the lower edge of the back of the collar
 - D. None of the above

- 4.) Which of the following statements is true when wearing female earrings/studs?
 - A. One per ear, centered on the ear lobe, must be a small gold or silver ball (post or screw on)
 - B. Two per ear, centered on the top of the ear, must be large gold or silver ball (post or screw on)
 - C. Three per ear, centered on the ear lobe, can be of any color or style
 - D. Earrings/studs are not authorized to be worn with the NJROTC uniform

- 5.) Male sideburns will be neatly trimmed, tailored, and shall not exceed below a point level with the....
 - A. Lower part of the jaw
 - B. Bottom of the ear lobe
 - C. Top of the ear
 - D. Middle of the ear

- 6.) In uniform, necklaces are authorized but shall not be....
- A. Any color other than gold or silver
 - B. Expensive
 - C. Visible
 - D. Heavy braid
- 7.) In uniform, rings are authorized, but no more than ____ may be worn on each hand.
- A. One
 - B. Two
 - C. Three
 - D. Four
- 8.) What color and type of tee-shirt will be worn with all NJROTC uniforms?
- A. Plain black crew neck or V-neck
 - B. Plain white crew neck
 - C. Any white tee-shirt with a design on it
 - D. Any white turtleneck
- 9.) Rank/rate and the JROTC bar insignia are centered at what distance from the collar point on the male and female short sleeve Khaki shirt.
- A. 1/4 inch
 - B. 1 and 1/2 inch
 - C. 1 and 7/8 inch
 - D. 2 and 1/2 inch
- 10.) How is the most senior ribbon worn on the uniform shirt when there is more than one ribbon?
- A. On the bottom row and outboard
 - B. On the top row and outboard
 - C. On the bottom row and inboard
 - D. On the top row an inboard
- 11.) How often do NJROTC cadets wear their uniform?
- A. Daily for one period
 - B. Daily
 - C. Weekly for the NJROTC class
 - D. Once weekly for the entire day

- 12.) Uniform socks will be _____
- A. Clean white socks
 - B. Neutral colored and clean
 - C. Any color that are clean
 - D. Black plain or rib knit
- 13.) The United States flag signifies?
- A. Liberty
 - B. Justice
 - C. Freedom of all
 - D. All of the above
- 14.) It is the universal custom to display the United States flag from what start time to what ending time?
- A. Sunrise to sunset
 - B. 0600 to 1200
 - C. 1100 to 1500
 - D. 24 hours a day
- 15.) What is the preferred method of destroying a flag unfit for public display?
- A. Shredding
 - B. Burying
 - C. Burning
 - D. Jettison at sea
- 16.) When you are in uniform and outdoors and you hear the national anthem played and the flag is not visible, what do you do?
- A. Stand at attention, face the music and render a salute
 - B. Stand at attention, face due North and render a salute
 - C. Stand at parade rest until the music stops, then carry on
 - D. Salute the nearest officer smartly
- 17.) What should you do if, while outdoors in civilian clothes, you hear the national anthem but the flag is not visible?
- A. Carry on, as you are not in uniform
 - B. Stand at attention and face in the direction of the music
 - C. Stand at attention and face in the direction of the parade field
 - D. Salute smartly the nearest officer

- 18.) The National Ensign may be displayed twenty-four hours a day under which of the following situations?
- A. Never
 - B. When properly illuminated during the hours of darkness
 - C. During the funeral of a former President
 - D. Only with the President's approval
- 19.) Petty officer First Class is designated by a collar device of?
- A. An eagle perched over one rocker
 - B. An eagle perched over one chevron
 - C. An eagle perched over three chevrons
 - D. An eagle perched over three rockers
- 20.) What does a chevron on a collar device look like?
- A. A rocker on a rocking chair
 - B. A flat drawing of an indian tepee
 - C. Half of a link of chain
 - D. The letter V
- 21.) Cadet Senior chief Petty Officer (c/SCPO) is designated by a collar device of?
- A. An eagle perched over three chevrons
 - B. An eagle and one star perched on a fouled anchor
 - C. An eagle perched over two chevrons
 - D. An eagle perched over one chevron
- 22.) A cadet Commander is designated by a collar device of?
- A. On single gold bar
 - B. Three attached gold bars
 - C. Five attached gold bars
 - D. Five attached gold bars with stars
- 23.) A cadet Lieutenant (Junior Grade) is designated by a collar device of?
- A. Three attached gold bars
 - B. Two attached gold bars
 - C. Five attached gold bars
 - D. Four attached gold bars

24.) Advancement to officer status requires an individual who has demonstrated superior quality of leadership, integrity, personal appearance, conduct and patriotism?

- A. True
- B. False

25.) Petty Officer Third Class is designated by a collar device of?

- A. An eagle perched over one rocker
- B. An eagle perched over one chevron
- C. An eagle perched over three chevrons
- D. An eagle perched over three rockers

26.) A cadet Lieutenant Commander is designated by a collar device of?

- A. Two attached gold bars
- B. Three attached gold bars
- C. Five attached gold bars
- D. Four attached gold bars

27.) A cadet Ensign is designated by a collar device of ?

- A. Three gold bars
- B. Two gold bars
- C. One gold bar
- D. One silver bar

28.) A reduction in rank/grade is based on unacceptable performance and is called a?

- A. Demerit
- B. Demolition
- C. Demotion
- D. Deduction

29.) A cadet Seaman Recruit can expect, when qualified, to be advanced to?

- A. Cadet Seaman
- B. Cadet Seaman Apprentice
- C. Cadet Petty Officer
- D. Cadet Chief Petty Officer

30.) At the position of Parade Rest.....


- A. Your right hand touches your back below the belt area
- B. Your right hand is inside your left hand behind your back
- C. Your left foot has moved 15 inches to the left
- D. Your left hand loosely holds the thumb of the right hand

- 31.) When the command “ATTENTION” is given, you turn your feet out equally to from an angle of how many degrees?
- A. 15 degrees
 - B. 25 degrees
 - C. 35 degrees
 - D. 45 degrees
- 32.) When the command “ PARADE, REST” is given, what action is taken concerning your feet?
- A. Move your left foot smartly 12 inches to the left
 - B. Move your right foot smartly 12 inches to the right
 - C. Relax your legs but keep your weight on the left foot
 - D. Relax your legs but keep your weight on the right foot
- 33.) Which of the following commands can only be given when you are at parade rest?
- A. AT EASE
 - B. FALL OUT
 - C. DISMISSED
 - D. ATTENTION
- 34.) When you are at “ EYES, RIGHT” your head is turned smartly to the right and you look at a?
- A. 15 degrees
 - B. 30 degrees
 - C. 45 degrees
 - D. 60 degrees
- 35.) Which one of the following commands is given that allows you to leave your place in rank but you remain nearby
- A. FALL IN
 - B. FALL OUT
 - C. DISMISSED
 - D. PARADE REST
- 36.) What is the command given to the position of attention when you are at “ EYES, RIGHT”
- A. READY, TWO
 - B. EYES, FRONT
 - C. READY, FRONT
 - D. EYES, FORWARD

37.) When at halt, the command to march forward taking 30 inch steps is

- A. FORWARD, MARCH
- B. QUICK TIME, MARCH
- C. DOUBLE TIME, MARCH
- D. None of the above


38.) Cadet lieutenant commander



39.) Cadet Chief Petty Officer



A.



B.



C.



D.

40.) Cadet Petty Officer First Class



A.



B.

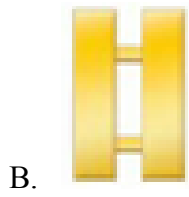



C.




D.

41.) Cadet Senior Chief Petty Officer



42.) Cadet Seaman Apprentice



43.) Cadet Ensign



44.) Cadet Petty Officer Third Class



A.



B.




C.



D.

45.) Cadet Lieutenant



46.) Ensign O-1



A.



B.



C.



D.

47.) Seaman E-3



A.



B.




C.



D.

48.) Petty Officer First Class



49.) Lieutenant O-3



A.



B.



C.



D.

50.) Master Chief Petty Officer E-9



PRACTICAL

SEAMAN APPRENTICE EXAM	SCALE
FALL IN	1 2 3
ATTENTION	1 2 3
DRESS RIGHT, DRESS	1 2 3
READY, FRONT	1 2 3
COVER	1 2 3
PARADE, REST	1 2 3
ATTENTION	1 2 3
RIGHT, FACE	1 2 3
FORWARD, MARCH	1 2 3
MARK TIME, MARCH	1 2 3
PLATOON, HALT	1 2 3
LEFT, FACE	1 2 3
ABOUT, FACE	1 2 3
ABOUT, FACE	1 2 3
PLATOON, FALLOUT	1 2 3
SCORE (30/45 Minimum)	TOTAL:

CIRCLE ONE: PASS or FAIL